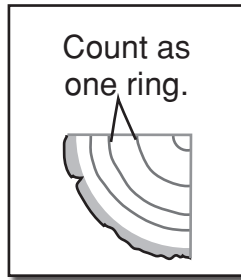


Name \_\_\_\_\_

Comparing numbers  
K.CC.C.7

# Read the Rings

Count the rings.  
Write.  
Circle the larger number.




Counting a tree's rings tells us how old the tree is. This tree is seven years old.



1.



\_\_\_\_\_



\_\_\_\_\_

2.



\_\_\_\_\_



\_\_\_\_\_

3.




\_\_\_\_\_



\_\_\_\_\_

4.



\_\_\_\_\_



\_\_\_\_\_

5.



\_\_\_\_\_



\_\_\_\_\_

6.



\_\_\_\_\_



\_\_\_\_\_

**Is there a panda picture on your paper package? That means that the company that makes the paper is working to take care of our forests.**

©2013 Domtar. Text and design by The Education Center, LLC.



**Note to the teacher:** Get the inside scoop on a tree's growth rings and much more about [TheForestAcademy.com](http://TheForestAcademy.com), sponsored by Domtar.

# “Read the Rings”

## Answer Key

1. 4 3
2. 7 9
3. 6 10
4. 10 8
5. 7 5
6. 6 5

