

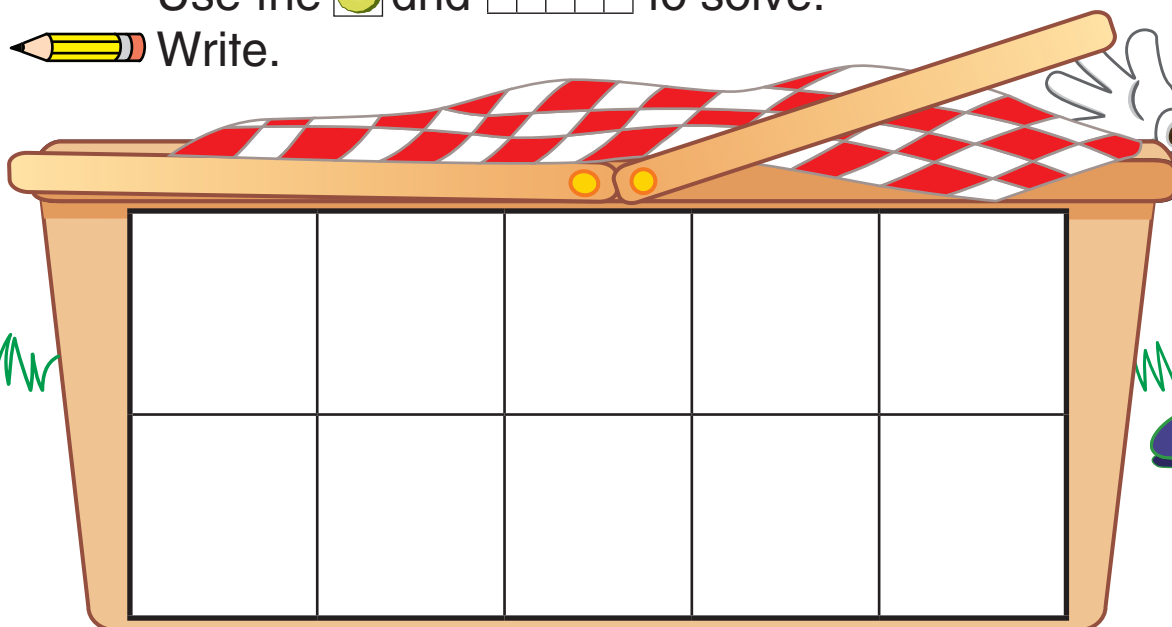

PICKLES FOR PICNICS!




Cut.

Use the  and  to solve.


Write.

A. I have 8 .How many more  do I need to make 10?


$$8 + \underline{\quad} = 10$$

B. I have 5 .How many more  do I need to make 10?


$$5 + \underline{\quad} = 10$$

C. I have 3 .How many more  do I need to make 10?

$$3 + \underline{\quad} = 10$$

D. I have 6 .How many more  do I need to make 10?

$$6 + \underline{\quad} = 10$$



Answer Key
“Pickles for Picnics” (K.OA.A.4)

- A. $8 + \underline{2} = 10$
- B. $5 + \underline{5} = 10$
- C. $3 + \underline{7} = 10$
- D. $6 + \underline{4} = 10$